

# ひとけたのひきざん


が	に	□ □
ねん	くみ	






ひとけたのひきざんをしてみましょう


 $8 - 4 = \square$ 







 $4$ 












 $8 - 1 = \square$ 


 $1$ 











 $8 - 2 = \square$ 


 $2$ 






 $4 - 1 = \square$ 


 $1$ 






 $9 - 2 = \square$ 


 $2$ 





保護者欄

★に色を塗って、評点してください。

てんすう

